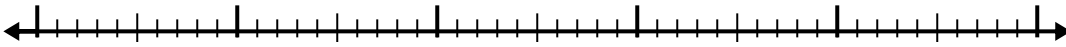


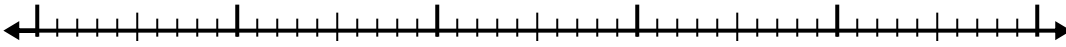


Use the number line to solve each problem.

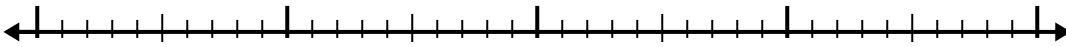
1)  $2.6 + 3.6 =$



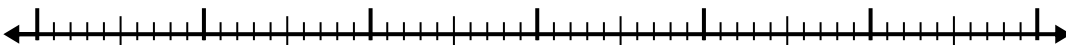
2)  $3 + 2.2 =$



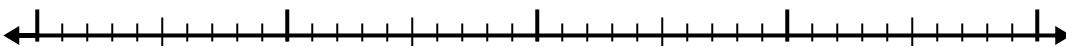
3)  $1.1 + 2.2 =$



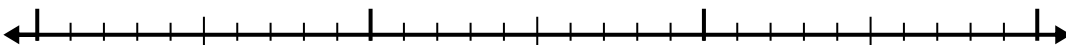
4)  $3.7 + 3.9 =$



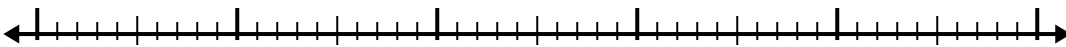
5)  $8.2 + 2.2 =$



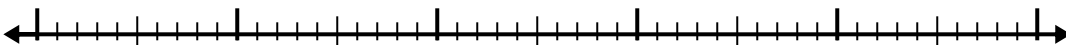
6)  $5.4 + 1.8 =$



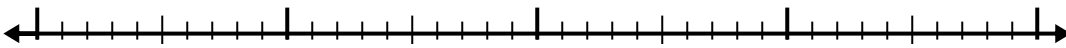
7)  $2.2 + 3.6 =$



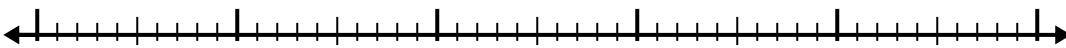
8)  $5.4 + 2.8 =$



9)  $3.5 + 2.2 =$



10)  $1.9 + 2.2 =$



Answers

1. \_\_\_\_\_

2. \_\_\_\_\_

3. \_\_\_\_\_

4. \_\_\_\_\_

5. \_\_\_\_\_

6. \_\_\_\_\_

7. \_\_\_\_\_

8. \_\_\_\_\_

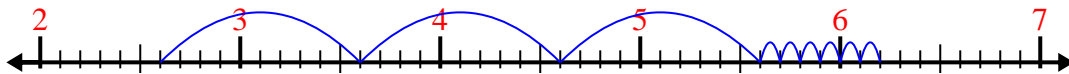
9. \_\_\_\_\_

10. \_\_\_\_\_

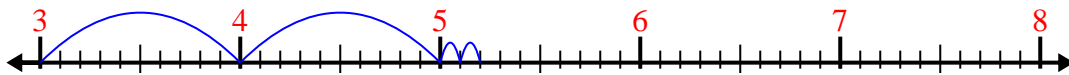


Use the number line to solve each problem.

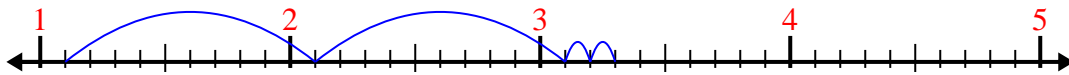
1)  $2.6 + 3.6 =$



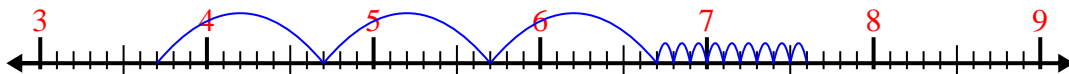
2)  $3 + 2.2 =$



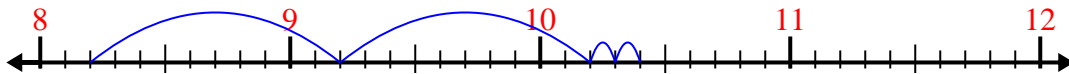
3)  $1.1 + 2.2 =$



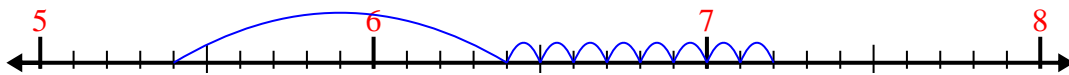
4)  $3.7 + 3.9 =$



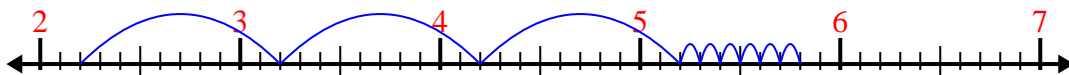
5)  $8.2 + 2.2 =$



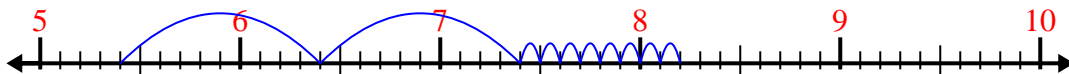
6)  $5.4 + 1.8 =$



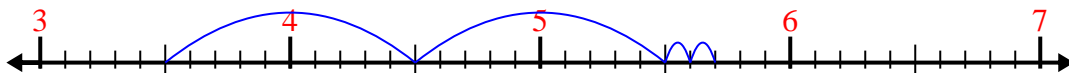
7)  $2.2 + 3.6 =$



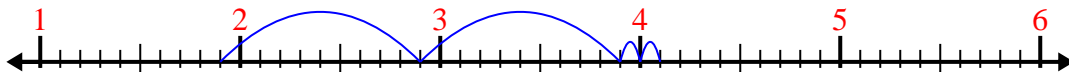
8)  $5.4 + 2.8 =$



9)  $3.5 + 2.2 =$



10)  $1.9 + 2.2 =$



Answers

1. 6.2

2. 5.2

3. 3.3

4. 7.6

5. 10.4

6. 7.2

7. 5.8

8. 8.2

9. 5.7

10. 4.1